

ANIMAL ADDITION



Once you've worked out your answer, write it in the square, then write the sum on the line below.





+



=



+



=



+



=



+



=



+



=

ANIMAL ADDITION

Once you've worked out your answer, write it in the square, then write the sum on the line below.

$$3 + \begin{array}{c} \text{giraffe} \\ \text{giraffe} \end{array} = \square$$

$$0 + \begin{array}{c} \text{elephant} \\ \text{elephant} \\ \text{elephant} \\ \text{elephant} \end{array} = \square$$



$$5 + \begin{array}{c} \text{antelope} \\ \text{antelope} \\ \text{antelope} \end{array} = \square$$


$$5 + \begin{array}{c} \text{wolf} \\ \text{wolf} \\ \text{wolf} \\ \text{wolf} \\ \text{wolf} \end{array} = \square$$

$$6 + \begin{array}{c} \text{lion} \\ \text{lion} \\ \text{lion} \end{array} = \square$$

ANIMAL ADDITION


Once you’ve worked out your answer, write it in the square, then write the sum on the line below.


 +
 
 =

10
 =
 
 +

+
 
 =
 7

7
 =

 +
 

4
 +

 =
 6

ANIMAL ADDITION ANSWERS

Once you've worked out your answer, write it in the square, then write the sum on the line below.





+





=

3

$$1 + 2 = 3$$



+



=

4

$$2 + 2 = 4$$



+



=

3

$$2 + 1 = 3$$



+



=

5

$$3 + 2 = 5$$



+



=

6

$$2 + 4 = 6$$

ANIMAL ADDITION ANSWERS

Once you've worked out your answer, write it in the square, then write the sum on the line below.

$$3 + \begin{array}{c} \text{giraffe} \quad \text{giraffe} \end{array} = \boxed{5}$$

$$3 + 2 = 5$$

$$0 + \begin{array}{c} \text{elephant} \quad \text{elephant} \quad \text{elephant} \quad \text{elephant} \end{array} = \boxed{4}$$

$$0 + 4 = 4$$

$$5 + \begin{array}{c} \text{goat} \quad \text{goat} \quad \text{goat} \end{array} = \boxed{8}$$

$$5 + 3 = 8$$

$$5 + \begin{array}{c} \text{wolf} \quad \text{wolf} \quad \text{wolf} \quad \text{wolf} \quad \text{wolf} \end{array} = \boxed{10}$$

$$5 + 5 = 10$$


$$6 + \begin{array}{c} \text{lion} \quad \text{lion} \quad \text{lion} \end{array} = \boxed{9}$$

$$6 + 3 = 9$$



ANIMAL ADDITION ANSWERS

Once you've worked out your answer, write it in the square, then write the sum on the line below.



+



+



=

8

$$5 + 2 + 1 = 8$$

10

=



+

7

$$10 = 3 + 7$$

5

+



=

7

$$5 + 2 = 7$$

7

=

3

+



$$7 = 3 + 4$$

4

+

2

=

6

$$4 + 2 = 6$$